

A

Number Correct: _____

Addition

1.	$3 + 1 =$	
2.	$4 + 1 =$	
3.	$5 + 1 =$	
4.	$9 + 1 =$	
5.	$6 + 1 =$	
6.	$8 + 1 =$	
7.	$2 + 1 =$	
8.	$7 + 1 =$	
9.	$1 + 7 =$	
10.	$1 + 9 =$	
11.	$1 + 6 =$	
12.	$2 + 2 =$	
13.	$3 + 2 =$	
14.	$4 + 2 =$	
15.	$8 + 2 =$	
16.	$5 + 2 =$	
17.	$6 + 2 =$	
18.	$7 + 2 =$	
19.	$2 + 7 =$	
20.	$2 + 8 =$	
21.	$2 + 5 =$	
22.	$2 + 6 =$	

23.	$1 + 2 =$	
24.	$3 + 6 =$	
25.	$1 + 8 =$	
26.	$2 + 3 =$	
27.	$1 + 4 =$	
28.	$2 + 4 =$	
29.	$1 + 3 =$	
30.	$1 + 5 =$	
31.	$3 + 3 =$	
32.	$4 + 3 =$	
33.	$5 + 3 =$	
34.	$6 + 3 =$	
35.	$7 + 3 =$	
36.	$3 + 7 =$	
37.	$3 + 4 =$	
38.	$3 + 5 =$	
39.	$4 + 4 =$	
40.	$5 + 4 =$	
41.	$6 + 4 =$	
42.	$4 + 6 =$	
43.	$4 + 5 =$	
44.	$5 + 5 =$	

B

Number Correct: _____

Improvement: _____


Addition

1.	$2 + 1 =$	
2.	$3 + 1 =$	
3.	$4 + 1 =$	
4.	$8 + 1 =$	
5.	$5 + 1 =$	
6.	$7 + 1 =$	
7.	$9 + 1 =$	
8.	$6 + 1 =$	
9.	$1 + 6 =$	
10.	$1 + 9 =$	
11.	$1 + 7 =$	
12.	$2 + 2 =$	
13.	$3 + 2 =$	
14.	$4 + 2 =$	
15.	$7 + 2 =$	
16.	$5 + 2 =$	
17.	$8 + 2 =$	
18.	$6 + 2 =$	
19.	$2 + 6 =$	
20.	$2 + 8 =$	
21.	$2 + 5 =$	
22.	$2 + 7 =$	

23.	$1 + 8 =$	
24.	$3 + 7 =$	
25.	$1 + 5 =$	
26.	$2 + 4 =$	
27.	$1 + 4 =$	
28.	$2 + 3 =$	
29.	$1 + 3 =$	
30.	$1 + 2 =$	
31.	$3 + 3 =$	
32.	$4 + 3 =$	
33.	$5 + 3 =$	
34.	$7 + 3 =$	
35.	$6 + 3 =$	
36.	$3 + 6 =$	
37.	$3 + 5 =$	
38.	$3 + 4 =$	
39.	$4 + 4 =$	
40.	$5 + 4 =$	
41.	$6 + 4 =$	
42.	$4 + 6 =$	
43.	$4 + 5 =$	
44.	$5 + 5 =$	

A

Number Correct:



Name _____


Date _____

*Make a ten to add.

1.	$9 + 1 + 3 = \square$		16.	$6 + 4 + 5 = \square$	
2.	$9 + 1 + 5 = \square$		17.	$6 + 4 + 6 = \square$	
3.	$1 + 9 + 5 = \square$		18.	$4 + 6 + 6 = \square$	
4.	$1 + 9 + 1 = \square$		19.	$4 + 6 + 5 = \square$	
5.	$5 + 5 + 4 = \square$		20.	$4 + 5 + 6 = \square$	
6.	$5 + 5 + 6 = \square$		21.	$5 + 3 + 5 = \square$	
7.	$5 + 5 + 5 = \square$		22.	$6 + 5 + 5 = \square$	
8.	$8 + 2 + 1 = \square$		23.	$1 + 4 + 9 = \square$	
9.	$8 + 2 + 3 = \square$		24.	$9 + 1 + \square = 14$	
10.	$8 + 2 + 7 = \square$		25.	$8 + 2 + \square = 11$	
11.	$2 + 8 + 7 = \square$		26.	$\square + 3 + 4 = 13$	
12.	$7 + 3 + 3 = \square$		27.	$2 + \square + 6 = 16$	
13.	$7 + 3 + 6 = \square$		28.	$1 + 1 + \square = 11$	
14.	$7 + 3 + 7 = \square$		29.	$19 = 5 + \square + 9$	
15.	$3 + 7 + 7 = \square$		30.	$18 = 2 + \square + 6$	

B

Number Correct:




Name _____

Date _____

*Make a ten to add.

1.	$5 + 5 + 4 = \square$		16.	$6 + 4 + 2 = \square$	
2.	$5 + 5 + 6 = \square$		17.	$6 + 4 + 3 = \square$	
3.	$5 + 5 + 5 = \square$		18.	$4 + 6 + 3 = \square$	
4.	$9 + 1 + 1 = \square$		19.	$4 + 6 + 6 = \square$	
5.	$9 + 1 + 2 = \square$		20.	$4 + 7 + 6 = \square$	
6.	$9 + 1 + 5 = \square$		21.	$5 + 4 + 5 = \square$	
7.	$1 + 9 + 5 = \square$		22.	$8 + 5 + 5 = \square$	
8.	$1 + 9 + 6 = \square$		23.	$1 + 7 + 9 = \square$	
9.	$8 + 2 + 4 = \square$		24.	$9 + 1 + \square = 11$	
10.	$8 + 2 + 7 = \square$		25.	$8 + 2 + \square = 12$	
11.	$2 + 8 + 7 = \square$		26.	$\square + 3 + 4 = 14$	
12.	$7 + 3 + 7 = \square$		27.	$3 + \square + 7 = 20$	
13.	$7 + 3 + 8 = \square$		28.	$7 + 8 + \square = 17$	
14.	$7 + 3 + 9 = \square$		29.	$16 = 3 + \square + 6$	
15.	$3 + 7 + 9 = \square$		30.	$19 = 2 + \square + 7$	

iM[®] Talking Math



Launch

What math questions could you ask about this picture?

Grade

1

Where do you see triangles in the picture?

What shapes in the picture could you put together to make a different shape?



iM[®] Talking Math



Launch

How many do you see?
How do you see them?

Grade
1

How many more whole oranges
are there than half oranges?



iM[®] Talking Math



Launch

What do you notice?

What do you wonder?

Grade 1

If 12 more ducks joined the group, how many would there be altogether? Explain or show how you know.



iM[®] Talking Math



This is one pea pod split open.

Launch


What math questions do you have, could you ask, and could you answer about this picture?

Grade

1

After a rabbit ate some peas from this pod there were 7 peas left. How many peas did the rabbit eat?

iM[®] Talking Math



Launch
Tell a story about the picture.

**Grade
1**

If 8 more elephants came to the watering hole, how many elephants would there be? Explain or show how you know.



20 Tickets!

Bo bought 20 tickets to play games at Family Fun Night at his school. He wants to play each game at least once. He needs to use all of his tickets. How many times might he play each game? Find at least two ways he can do it.

Game	Number of Tickets Needed
Ring Toss	1
Putt-Putt Golf	2
Soccer Kick	3
Moonwalk	5

